

# Computer Systems and -architecture

## Project 1: Gates and Wires

1 Ba INF 2021-2022

Brent van Bladel  
brent.vanbladel@uantwerpen.be

*Don't hesitate to contact the teaching assistant of this course. You can reach him in room M.G.305 or by e-mail.*

## Time Schedule

Projects are solved in pairs of two students. Projects build on each other, to converge into a unified whole at the end of the semester. During the semester, you will be evaluated three times. At these evaluation moments, you will present your solution of the past projects by giving a demo and answering some questions. You will immediately receive feedback, which you can use to improve your solution for the following evaluations.

For every project, you submit a small report of the project you made by filling in `verslag.html` completely. A report typically consists of 500 words and a number of drawings/screenshots. Put all your files in one tgz archive, as explained on the course's website, and submit your report to the exercises on Blackboard.

- Report deadline: **October 31, 2021, 23u55**
- Evaluation and feedback: **November 5, 2021**

## Project

Read sections B.1 and B.2 of Appendix B (*Note*: depending on the edition of the book, this can also be Appendix C. This Appendix is available on BlackBoard). You can only use the following Logisim libraries for this assignment: Base, Wiring, Gates, Input/Output. Read <http://www.cburch.com/logisim/docs/2.7/en/html/guide/tutorial/> to get started with Logisim.

1. Proof De Morgan's theorems by implementing both sides of each equation in Logisim, and verifying that the same inputs result in the same output.
  - (a)  $\overline{A + B} = \overline{A} \cdot \overline{B}$
  - (b)  $\overline{A \cdot B} = \overline{A} + \overline{B}$
2. (a) Use Logisim to build a NAND gate as a new component using only basic gates (AND, OR, NOT).









*Remember* that you can create new components in Logisim by clicking the "Add circuit" button, and that you can use this new component in other circuits.

- (b) Like the set of AND, OR, NOT gates, the singleton NAND gate set is functionally complete. This means that any algebraic expression or truth table can be implemented by using only NAND gates. Show that NAND is functionally complete by building an AND, OR and NOT gate using only your own NAND component in Logisim.
3. Implement the following truth table in Logisim using AND, OR and NOT gates. To do this, first write the truth table as a Boolean algebraic expression. Use as few gates as possible. A, B and C are inputs, and X and Y are outputs.

A	B	C	X	Y
0	0	0	1	1
0	0	1	1	1
0	1	0	0	1
0	1	1	0	0
1	0	0	1	1
1	0	1	0	0
1	1	0	0	1
1	1	1	0	0

4. Build a circuit that shows the representation of numbers 0 to 7 on a LED display.
- Compose a truth table with binary outputs for every LED on the *7-Segment Display*.
  - Find the Boolean algebraic expressions for this truth table. Discuss why these expressions are useful in the context of building a circuit.
  - Implement the circuit in Logisim. Make use of a 3-bit input and the *Splitter* component (from the *Base* library). Use the *7-Segment Display* of the *Input/Output* library.

The LED display should display numbers as follows:

Decimal number	binary representation	LED
0	000	
1	001	
2	010	
3	011	
4	100	
5	101	
6	110	
7	111	

5. To prepare for the next lab session, read section B.3, B.5 and B.6 of Appendix B.